

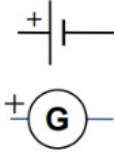



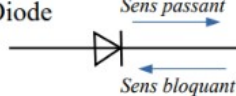
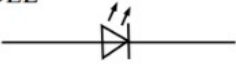






<http://salle15.fr/>  
Date : .....

**E23.2 Rappels.**  
**Mesures de grandeurs électriques**

Nom : ..... Prénom : .....  
Classe ..... Groupe ..... Table .....

**1. Rappels**

1.1. Dipôles

<p>Générateur</p> 	<p>Interrupteur</p> <ul style="list-style-type: none"><li>- Ouvert </li><li>- Ouvert </li><li>- Fermé </li></ul>	<p>Diode</p>  <p>DEL</p> 	<p>Multimètre</p>  voltmètre  ohmmètre  ampèremètre  milliampèremètre
<p>Résistance</p> 	<p>Lampe</p> 	<p>Moteur</p> 